

VEDANT PUBLIC SCHOOL

ISANPUR, AHMEDABAD - 382443.

Seat No. :

065 નંબર :

Total pages: - 09/09

EXAM :

પરીક્ષા :

SA-2

DATE :

તારીખ :

STD. / CLASS :

ધોરણ / વર્ગ :

I

SUBJECT: MATHS

વિષય :

REVISION

MAIN
મુખ્ય પુસ્તક

1 +

Supplements
પુસ્તક પુસ્તક

=

TOTAL
કુલSupervisor's Sign.
નિરીક્ષકની સહીExaminer's Sign.
પરીક્ષકની સહી

Ques. No.	Total Marks	Marks Obtain
1		
2		
3		
4		
5		
6		
7		
8		
TOTAL		

Write From Here / અહીંથી લખવું.

MATHS SA-2 PAPERSTYLE:-

COURSE:- 1-1 to 10

TOTAL MARKS - 60

PART-A

Q.1. Tick the correct option - 30M

PART-B

Q.1. Fill in the blanks - 10M

Q.2. Solve the followings - 5M

Q.3. Word problems - 5M

Q.4. Write Tables - 10M

1

PART-A

Q.1. Tick the correct option. :- [30m]

1. How many bananas are shown in the picture?



a. 10

b. 9

2. We can also use parts of our _____ to measure length?

a. Papers

b. body.

c. Legs

3. We measure weight using a _____

a. capacity

b. length

c. Weighing balance.

4. The pan with the heavier weight goes _____

a. Down.

b. up

c. Both of these.

5. There are _____ days in a week.

a. 12

b. 7.

c. 21

6. To subtract 10, 20, 30 etc from a number. we simply subtract 1, 2, 3 etc. respectively from the columns.

a. ones

b. tens

c. none of these.

7. The numbers 1, 2, 3, are called _____ numbers.

a. Cardinal

b. Addition

c. ordinal

8. First, second, third, are called _____ numbers.

a. Cardinal

b. ordinal

c. Multiplication

$$\square + \square + \square + \square + \square = \square$$

9. The result of Multiplication is called _____
 a. Repeated b. product c. Fact.
10. The sign of Multiplication is _____
 a. X b. + c. -
11. The Cardinal number of 7 is _____
 a. six b. seventh c. seven.
12. Which number comes just after 89?
 a. 88 b. 92 c. 90.
13. 8 tens is the same as _____
 a. 80 b. 81 c. 89
14. The greatest 2 digit number is _____
 a. 98 b. 99 c. 10
15. Which number comes just before _____ 96
 a. 97 b. 95 c. 92
16. Pick the greatest number from the following?
 a. 45 b. 50 c. 29
17. The between number of 70 _____ 72
 a. 71 b. 61 c. 69
18. Pick the smallest number from the following?
 a. 43 b. 12 c. 35

241
241
2415

4

$$\square + \square + \square + \square + \square = \square$$

19. Put the correct symbols of $>$, $<$, $=$ in

a. $53 < 55$ b. $53 > 55$ c. $53 = 55$

20. The expanded form of 42 is —
a. 4 tens + 2 ones b. $40 + 20$ c. None of these

21. The numeral of Twenty four is —
a. 24 b. 42 c. 12

22. The number name of 61 is —
a. Sixty b. sixtyone c. Sixteen.

23. A _____ has 4 sides
a. circle b. Triangle c. Square

24. A _____ has no sides or corners
a. Rectangle b. circle c. Triangle

25. A Ball is of _____ shape.
a. sphere b. cube c. Cone.

26. 4 tens + 7 ones =
a. 74 b. 47 c. 40

27. How many months are there in a year?
a. 12 b. 7 c. 24

28. $37 - 16 =$
a. 20 b. 21 c. 19

141

$$\square + \square + \square + \square + \square = \square$$

29. Which hand of the clock moves slower?
 a. Minute b. Hour c. Second
30. What is the short form of 5 tens and 7 tens?
 a. 57 b. 75 c. 76
31. $4 \times 8 =$ _____
 a. 32 b. 23 c. 33
32. The length between our elbow and the tips of fingers are called
 a. handspan b. Cubit c. footspan.
33. $5 \times 7 =$ _____
 a. 35 b. 53 c. 55
34. We use the _____ numbers to tell the position of something in a given order
 a. ordinal b. Cardinal c. positive
35. $32 + 24 =$ _____
 a. 56 b. 65 c. 55

PART-B

Q.1. Fill in the blanks:- (10m)

- The ordinal number of 9 is Ninth
- A is the first letter in the english alphabet.
- $3 \times 4 = 12$ is called a Multiplication fact.

+ + + + =

4. $4+4+4+4$ is called a Repeated addition

5. I is the Ninth letter in the english alphabet.

6. + - + - + - + -

7. Name the shape O oval.

8. $48 - 23 = 25$.

9. $37 + 10 = 47$.

10. $5 \times 4 = 20$.

11. $4 \times 8 = 32$.

12. 2 tens + 4 ones = 24.

13. 30 31.

14. 49 50.

15. 28 29 30.

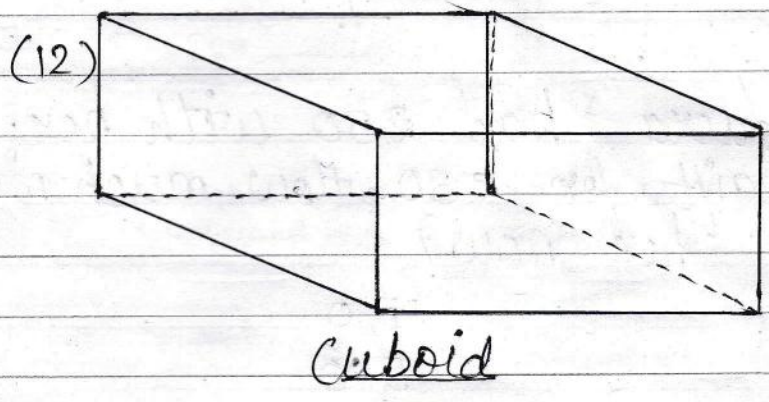
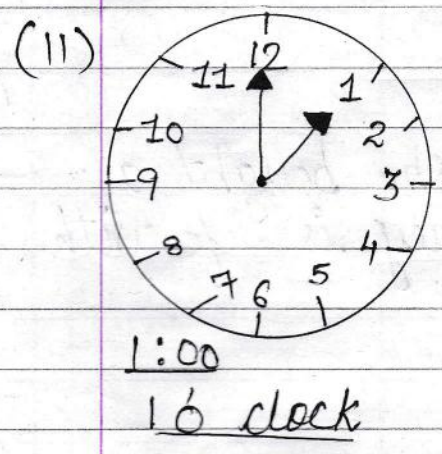
Q.2. Solve the Followings :- (5m)

(1)	T O	T O	T O	T O	T O
	1	1	1	1	1
	6 5	5 1	7 7	1 3	5 5
	+ 2 5	+ 9	+ 1 6	+ 2 9	+ 3 5
	9 0	6 0	9 3	4 2	9 0

7

□ + □ + □ + □ + □ = □

(6)	TO	TO	TO	TO	TO
	4 10	4 17	7 13	7 16	6 16
	50	57	83	88	76
	-36	-28	-75	-39	-27
	14	29	08	47	49



- (14) 46, 39, 67, 82, 75 (Ascending order)
A- 39, 46, 67, 75, 82
- (15) 59, 79, 49, 69, 89 (Descending order)
A- 89, 79, 69, 59, 49

Q.5. Word problems:- (5m)

1. 5 buses and 34 Cars are moving on the road. How many total vehicles are moving on the road?

$$\begin{array}{r} 34 \\ + 5 \\ \hline 39 \end{array}$$

| 7 |

$$\square + \square + \boxed{8} + \square + \square = \square$$






2. There are 95 apples in the basket. 24 apples got rotten. How many apples are left fresh in the basket?

$$\begin{array}{r} T.O \\ 95 \\ - 24 \\ \hline 71 \end{array}$$

3. Laera had ₹50 with her. She bought a gift for ₹30. How much money is left with her now?

$$\begin{array}{r} T.O \\ 50 \\ - 30 \\ \hline 20 \end{array}$$

4. Write the value of the combinations of coins and notes?



=

$$₹ (50 + 20 + 10 + 5 + 2) = ₹87$$

5. Join A and B with a straight line



6. Join x and y with a curved line.

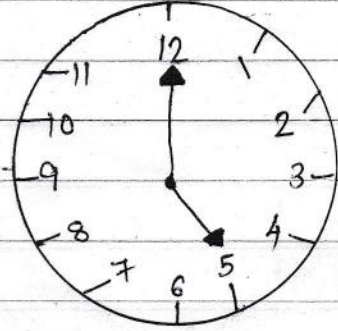


8

۲۰۲۱
۲۰۲۰
۱۳۹۹

$$\square + \square + \boxed{9} + \square + \square = \square$$

7. What is the time in the given clock?



5:00
5 o'clock

Q.4. Write Tables of 2, 3, 4 and 5:- [10m]